

SECTION I

**5 Questions
5 Marks**

Directions for Questions (1-5): Each question has four choices. Choose the one that best completes the sentence.

Question 1 A trip from Delhi to London _____ about seven hours.

- Options:** (a) take (b) takes
(c) taking (d) taken

Question 2 The synonym of nurture is _____.

- Options:** (a) to ripen (b) care for
(c) relieve (d) doctor

Question 3 The antonym of Disperse is _____.

- Options:** (a) account for (b) gather up
(c) apply to (d) take apart

Question 4 Choose the appropriate tense:

I (see) Bill this morning, but I (not see) him since.

- Options :** (a) have seen, haven't seen (b) saw, haven't seen
(c) saw, didn't see (d) have seen, didn't see

Question 5 The following sentence is followed by four alternative versions of the portion in brackets. Select the alternative you consider most correct and most effective according to the requirements of standard written English.

Festivals are (usually enjoyed by children)

- Options :** (a) Most children enjoy festivals. (b) Festivals are enjoyed by children.
(c) Children mostly enjoy festivals. (d) Children can enjoy festivals most.

SECTION II

5 Questions
5 Marks

Directions for Questions (6-10): Choose the correct answer for the questions given below.

Question 6 A square garden has fourteen posts along each side at equal intervals. Find how many posts are there on all four sides:

- Options : (a) 56 (b) 52
(c) 44 (d) 60

Question 7 Average age of students of an adult school is 40 years. One hundred and twenty new students whose average age is 32 years join the school. This causes the average age of the school to be reduced by 4 years. Find the total number of students in the school after new students join the school?

- Options : (a) 1200 (b) 120
(c) 360 (d) 240

Question 8 Rupees 250 is added to the $\frac{1}{4}$ th of a given amount of money. The result obtained is Rupees 100 lesser than the $\frac{1}{3}$ rd of the same given amount of money. What is the given amount of money?

- Options : (a) 350 (b) 600
(c) 4200 (d) 3600

Question 9 Find the next number in the series 4, 8, 16, 32, ?

- Options : (a) 48 (b) 64
(c) 40 (d) 46

Question 10 Find the first number in the series ?, 19, 23, 29, 31

- Options : (a) 12 (b) 15
(c) 16 (d) 17

SECTION III

**5 Questions
5 Marks**

Directions for Questions (11-12): For each question, a set of four options is given. Select the option that correctly answers the question.

Question 11 Pointing to a girl in the picture, Stella said, “She is the mother of Rachael whose father is my son.” How is Stella related to the girl in the picture?

- Options :** (a) Mother (b) Aunt
(c) Cousin (d) Mother-in-law

Question 12 In a certain code, LANE is written as 5427 and GEAR is written as 3748. How is LEAN written in that code?

- Options :** (a) 5737 (b) 5741
(c) 5724 (d) 5742

Directions for Questions (13-15): Read the provided situation. For each question, a set of four options is given. Select the option that correctly answers the question on the basis of the information given in the situation.

Situation: Read the following information:

- Ali, Bhanu, Chetan, Dinesh, Eesha, Firoz, and Ganesh are sitting along a circle and are playing cards.
- Eesha is the neighbour of Ali and Dinesh.
- Ganesh is not between Firoz and Chetan.
- Ali is to the immediate left of Firoz.
- Bhanu is the neighbour of Dinesh and Ganesh.

Question 13 Who are the neighbours of Ganesh?

- Options :** (a) Chetan and Dinesh (b) Firoz and Dinesh
(c) Ali and Firoz (d) Chetan and Bhanu

Question 14 Who is sitting at the second place to the left of Chetan?

- Options :** (a) Ali (b) Firoz
(c) Bhanu (d) Dinesh

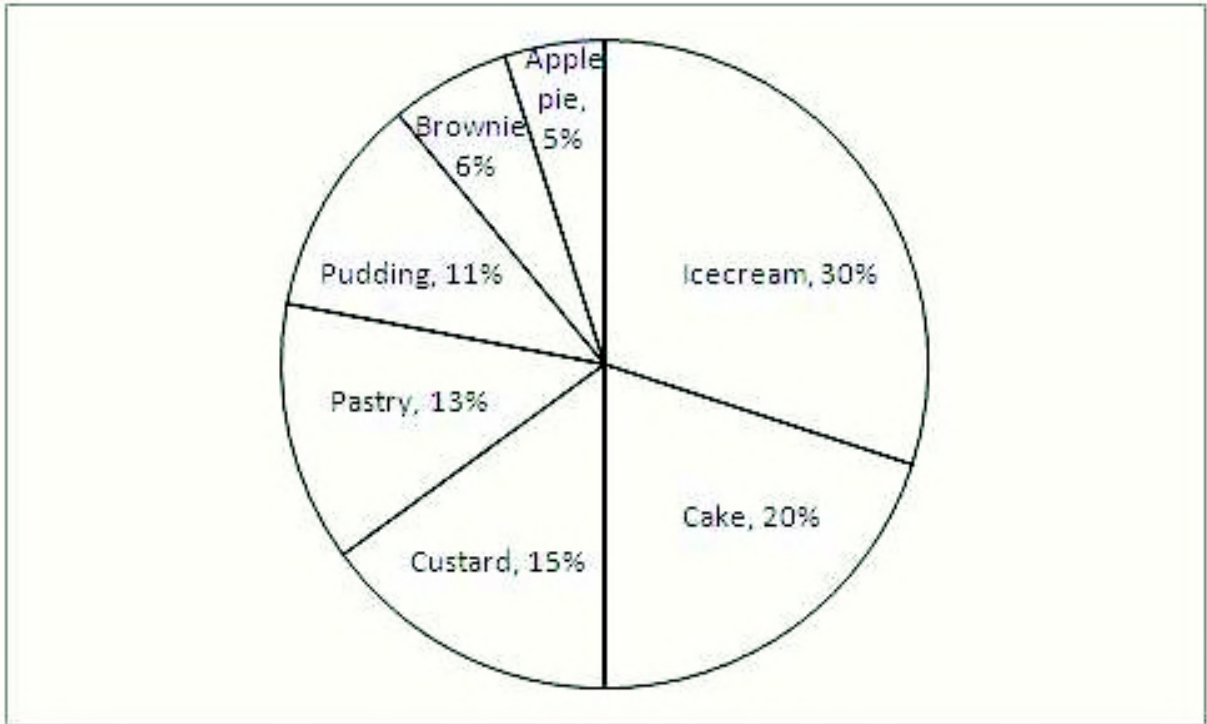
Question 15 In which of the following pairs is the second person sitting immediately to the right of the first?

- Options :** (a) Chetan and Firoz (b) Ganesh and Bhanu
(c) Dinesh and Bhanu (d) Ali and Eesha

SECTION IV

**5 Questions
5 Marks**

Directions for Questions (16-18): Study the given pie-chart, which is based on a statistical survey done on the dessert item preference of people. The survey is conducted on a sample of 30,000 people. Use this information to answer the following questions.



Question 16 What is the total number of people preferring ice cream and pastry?

- Options :** (a) 11,900 (b) 12,300
(c) 12,900 (d) 11,500

Question 17 What is the difference between the total number of people preferring brownie and the total number of people preferring apple pie?

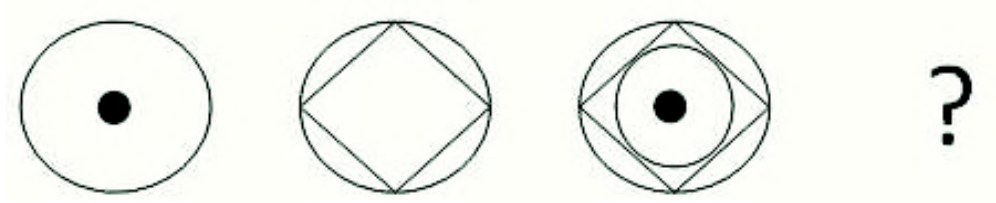
- Options :** (a) 150 (b) 200
(c) 300 (d) 350

Question 18 People who prefer pudding are approximately _____ percent of the people who prefer ice cream.

- Options :** (a) 48 (b) 35
(c) 46 (d) 37

Directions for Questions (19-20): Identify the missing picture in the following sequences.

Question 19



Options :

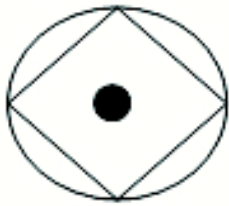
(a)



(b)



(c)



(d)



Question 20

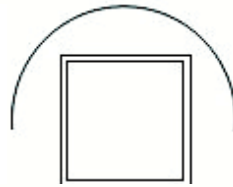


Options :


(a)



(b)



(c)



(d)



